

Adult Numeracy Skills for life

Measures, Shape & Space E1 (Adult Numeracy)

2006/2007 ALAN PRACTISE

advancing learning, changing lives

Adult Numeracy

Measures (E1)

Candidate's Name:							
Registration Number:							

THE FOLLOWING SECTIONS TO BE COMPLETED BY THE ASSESSOR

Centre Name:	Assessor's Name:						
	Signature:						
	Date test taken:						
Centre Number:							

THE FOLLOWING DETAILS CONFIRM THAT THE ASSESSOR HAS IN NO WAY INFLUENCED THE OUTCOME OF THE ASSESSMENT.

IF THIS CANDIDATE HAS HAD ANY ASSISTANCE DURING THIS TEST PLEASE STATE THE NATURE OF THE ASSISTANCE AND WHO PROVIDED IT:

--

IF THERE ARE ANY SPECIAL CIRCUMSTANCES THAT MAY HAVE HAD A NEGATIVE EFFECT ON THE CANDIDATE'S PERFORMANCE IN THIS TEST PLEASE GIVE DETAILS.


--

Internal Verifier's Name:	QUESTION NO	MARKS AVAILABLE	MARKS GIVEN	EXTERNAL VERIFIER USE
Signature:	1	3		
	2	3		
Date verified:	3	3		
	4	5		
	5	5		
	6	6		
	TOTAL	25		
	%	100%		
	Delete pass or fail as appropriate		PASS - FAIL	PASS - FAIL

(3 marks - 1 each for a, b and c)

Open Morning	Lunch	Closed Afternoon
7 o'clock	1 o'clock - 2 o'clock	6 o'clock

- 1a. The supermarket opens at 7 o'clock.
Draw the time on the clock face



- 1b. The supermarket closes at 6 o'clock. Is this morning or afternoon?
Tick (☒) one box.

Morning

☐

Afternoon

☐

- 1c. The supermarket opens before 8 o'clock. Is this true or false?
Tick (☒) one box.

True




☐

False

☐

(3 marks - 1 each for a, b and c)

Chris goes to the Leisure Centre.

Activities	Price
Gym	
Swimming	
Snooker	

2a. Chris pays £1.  Which activity is Chris doing? **Tick (☒) one box.**

Snooker


☐

Swimming

☐

2b. Chris wants to go to the gym.

Tick (☒) the correct number of coins he needs.



2c. How much does it cost for two people to play snooker?

Tick (☒) the correct amount.

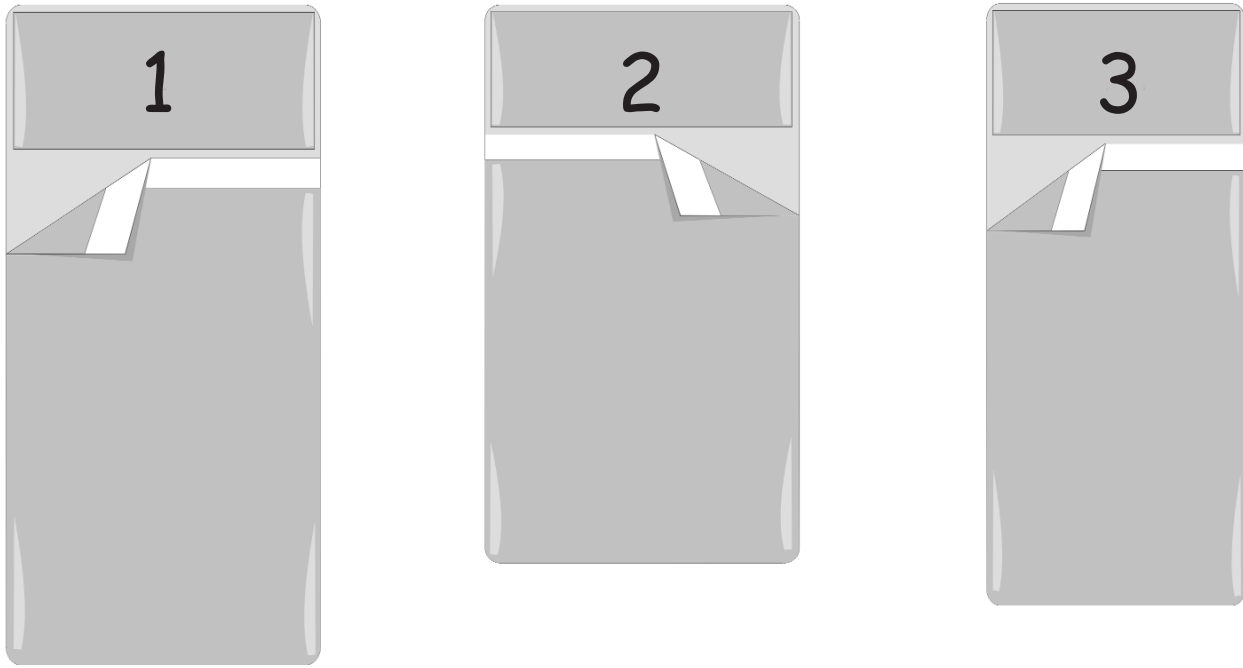

☐

☐

☐


(3 marks - 1 mark each for a, b and c)

Maria buys beds for her children.



3a. Which bed is the longest?

BED NUMBER:

3b. Maria looks at the width of the beds. Which bed is the same width as bed 1?

BED NUMBER:

3c. Which bed is the shortest? *Tick (☒) one box.*

BED 1

☐

BED 2

☐

BED 3

☐

(5 marks - 2 each for a and b and 1 for c)

4a. Write the days in the correct order.
Some have been done for you.

Days	Order
Tuesday	Monday
Monday	
Thursday	Wednesday
Friday	
Wednesday	Friday

4b. Put the seasons in order. *Two have been done for you.*

Season
Spring
Winter

4c. Summer is between Spring and Autumn. Is this true or false?
Tick (☒) one box.

True

☐

False

☐

(5 marks - 1 each for a, b, c, d and e)

Sam, Carlos and Harry are waiting for a train.



5a. Who is the tallest?

Answer =

5b. Carlos is shorter than Harry. Is this true or false?

Tick (☒) one box.

True

☐

False

☐

5c. A train can seat more people than a car. Is this true or false?

Tick (☒) one box.



True

☐

False

☐

5d. The car is heavier than the train. Is this true or false?

Tick (☒) one box.

True

☐

False

☐

5e. Harry and Carlos each buy a bottle of water. Which bottle has the most water in it? Tick (☒) one bottle.


☐

☐

(6 marks - 1 for each of a, b, c, d, e and f)

6a. What shape is the mirror?

a circle ☐ a rectangle ☐




6b. What shape is the towel?

a square ☐ a rectangle ☐



6c. What shape are the scales?

a square ☐ a circle ☐



6d. What shape is the container?


a rectangle ☐ a cube ☐



6e. The towel is inside the container. True or False. **Tick (☒) one box.**

True ☐


False ☐



6f. The scales are between the mirror and the container. True or False. **Tick (☒) one box.**

True ☐

False ☐



THIS IS THE END OF THE TEST.